



Mitt hefte med pluss

Nivå 2





Pluss



Pluss sammen tallene ved hjelp av skjemaet.

Hundrere	Tiere	Enere
	3	8
+	1	4


Hundrere	Tiere	Enere
	5	6
+	4	5

Hundrere	Tiere	Enere
	1	9
	6	3
+	4	4

Hundrere	Tiere	Enere
	2	1
	3	7
+	4	0



Pluss



Pluss sammen tallene ved hjelp av skjemaet.

Tiere	Enere
6	2
+	3

Tiere	Enere
2	2
+	5

Tiere	Enere
7	6
+	1

Tiere	Enere
3	8
+	6

Tiere	Enere
9	1
+	7

Tiere	Enere
3	4
+	2

Tiere	Enere
2	1
+	4

Tiere	Enere
1	8
+	4

Tiere	Enere
8	1
+	1

Riktig eller galt?



Sett ✓ ved de plusstykker som er riktig.

Sett ✗ ved de plusstykker som er feil.

$67 + 36 = 103$ $24 + 24 = 58$

$21 + 48 = 79$ $71 + 29 = 100$

$43 + 39 = 62$ $11 + 121 = 131$

$103 + 93 = 200$ $21 + 12 = 33$

$82 + 109 = 191$ $55 + 45 = 90$

$32 + 65 = 97$ $92 + 11 = 103$

$19 + 42 = 69$ $45 + 45 = 90$



Pluss



Bruk skjemaet til å finne ut av hva som skal plusses.

Tiere	Enere
7	7
+	2 1
9	8

Tiere	Enere
4	6
+	
6	9

Tiere	Enere
1	3
+	
5	7

Tiere	Enere
3	5
+	
6	8

Tiere	Enere
2	1
+	
7	6

Tiere	Enere
6	2
+	
9	3


Tiere	Enere
5	2
+	
8	5

Tiere	Enere
3	0
+	
4	4

Tiere	Enere
4	2
+	
7	6



Pluss med 3




Pluss med 3 og fyll ut de tomme rutene.

A crossword puzzle grid with numbers and arrows. The grid consists of black and white squares. The numbers and their directions are: 12 (horizontal, right), 27 (vertical, down), 30 (horizontal, right), 39 (horizontal, right). There are also several empty vertical and horizontal slots. Green arrows indicate the direction of the numbers: a right arrow for 12, a down arrow for 27, a right arrow for 30, and a down arrow for 39. There are also several empty vertical slots with down arrows and one empty horizontal slot with a right arrow.

33



Pluss



Regn ut plusstykkene.
Strek over tallet i den nederste boksen.

$30 + 32 = \underline{62}$

$57 + 31 = \underline{\quad}$

$41 + 13 = \underline{\quad}$

$20 + 35 = \underline{\quad}$

$93 + 6 = \underline{\quad}$

$32 + 23 = \underline{\quad}$

$54 + 16 = \underline{\quad}$

$9 + 38 = \underline{\quad}$

$87 + 11 = \underline{\quad}$

$65 + 15 = \underline{\quad}$

$24 + 49 = \underline{\quad}$



$26 + 73 = \underline{\quad}$

39 98 88 73 19 63 99 48

80 5 ~~62~~  70 99 55 47 54

Pluss

Legg sammen tallene.



	Hundrere	Tiere	Enere
	4	8	2
+	2	4	9

	Hundrere	Tiere	Enere
	7	0	3
+	1	2	7

	Hundrere	Tiere	Enere
	3	1	6
+	2	5	5

	Hundrere	Tiere	Enere
	6	3	8
+	3	7	0

	Hundrere	Tiere	Enere
	2	4	7
+	7	2	2

	Hundrere	Tiere	Enere
	2	4	8
+	5	1	8



Samme sum

Finn den samme summen.



$41 + 29$



$15 + 44$



$51 + 34$



$62 + 23$



$38 + 21$



$59 + 11$



$40 + 20$



$35 + 44$



$67 + 12$



$11 + 48$



$23 + 36$

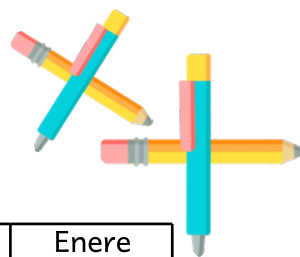



$5 + 55$



Pluss

Legg sammen tallene.



	Hundrere	Tiere	Enere
	3	9	1
+	3	2	7

	Hundrere	Tiere	Enere
	5	3	6
+	1	4	9

	Hundrere	Tiere	Enere
	7	3	2
+	2	2	2

	Hundrere	Tiere	Enere
	4	8	2
+	5	1	3

	Hundrere	Tiere	Enere
	1	3	8
+	1	6	9

	Hundrere	Tiere	Enere
	4	7	0
+	2	4	3



Pluss

Legg sammen tallene.



$$21 + 64 + 31 =$$

$$25 + 25 + 50 =$$

$$37 + 12 + 14 =$$

$$24 + 41 + 31 =$$

$$37 + 12 + 14 =$$

$$3 + 13 + 74 =$$

$$48 + 10 + 11 =$$

$$12 + 63 + 15 =$$