

Mitt hefte med pluss

Nivå 1





Pluss

Legg sammen prikkene på terningene.



6 + 2 =

3 + 5 =

4 + 6 =

4 + 3 =

5 + 1 =

3 + 2 =








2 + 1 =

5 + 4 =

1 + 6 =

Pluss

Legg sammen prikkene på terningene.

	$4+1=$
	$6+4=$
	$2+2=$
	$3+5=$
	$1+6=$
	$2+5=$
	$6+5=$



Pluss



Legg sammen prikkene på terningene.



$$\begin{array}{r} 4 \quad + \quad 3 \\ \hline = \quad \underline{7} \end{array}$$



$$\begin{array}{r} \quad + \quad \\ \hline = \quad \underline{\quad} \end{array}$$



$$\begin{array}{r} \quad + \quad \\ \hline = \quad \underline{\quad} \end{array}$$



$$\begin{array}{r} \quad + \quad \\ \hline = \quad \underline{\quad} \end{array}$$



$$\begin{array}{r} \quad + \quad \\ \hline = \quad \underline{\quad} \end{array}$$



$$\begin{array}{r} \quad + \quad \\ \hline = \quad \underline{\quad} \end{array}$$



$$\begin{array}{r} \quad + \quad \\ \hline = \quad \underline{\quad} \end{array}$$



$$\begin{array}{r} \quad + \quad \\ \hline = \quad \underline{\quad} \end{array}$$



$$\begin{array}{r} \quad + \quad \\ \hline = \quad \underline{\quad} \end{array}$$

Lag et tall

Skriv inn tall i rutene som tilsammen blir 10, 9, 8 og 7.



Lag 10

$$\square + \square = 10$$

$$\square + \square = 10$$

$$\square + \square = 10$$

$$\square + \square = 10$$

Lag 9

$$\square + \square = 9$$

$$\square + \square = 9$$

$$\square + \square = 9$$

$$\square + \square = 9$$

Lag 8

$$\square + \square = 8$$

$$\square + \square = 8$$

$$\square + \square = 8$$

$$\square + \square = 8$$

Lag 7

$$\square + \square = 7$$

$$\square + \square = 7$$

$$\square + \square = 7$$

$$\square + \square = 7$$

Pluss

Legg sammen prikker på terningene og skriv svaret i den tomme ruten.

$$1 + 1 = \square$$

$$2 + 2 = \square$$

$$3 + 3 = \square$$

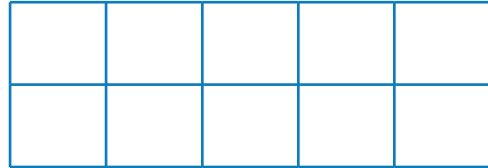

$$4 + 4 = \square$$

$$5 + 5 = \square$$

$$6 + 6 = \square$$

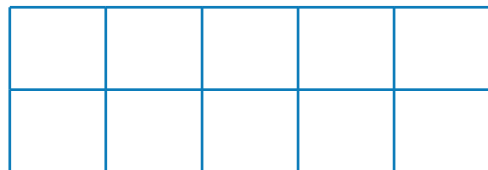
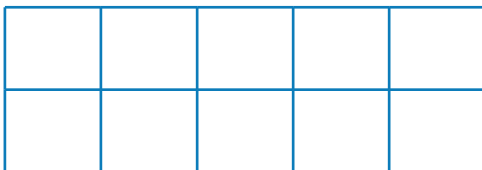
Lag 10

Skriv inn tall i de tomme boksene som tilsammen blir 10. Bruk de blå rutene til hjelp.



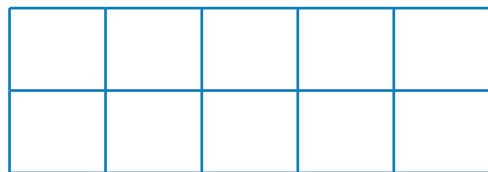
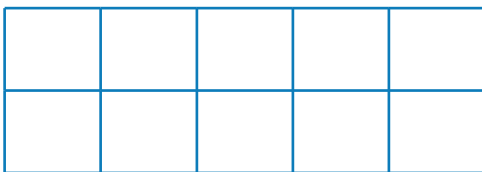
$$\textcircled{3} + \textcircled{7} = 10$$

$$\textcirc{\quad} + \textcirc{\quad} = 10$$



$$\textcirc{\quad} + \textcirc{\quad} = 10$$

$$\textcirc{\quad} + \textcirc{\quad} = 10$$



$$\textcirc{\quad} + \textcirc{\quad} = 10$$

$$\textcirc{\quad} + \textcirc{\quad} = 10$$



Pluss 10 og 1

Legg 10 og 1 til tallet i midten.

Pluss 1	87	Pluss 10
---------	----	----------



Pluss 1	15	Pluss 10
---------	----	----------

Pluss 1	56	Pluss 10
---------	----	----------

Pluss 1	6	Pluss 10
---------	---	----------

Pluss 1	72	Pluss 10
---------	----	----------

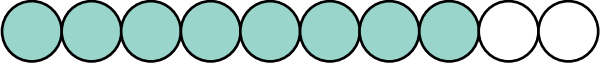
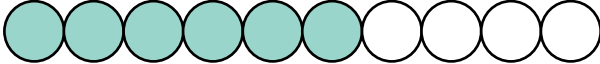
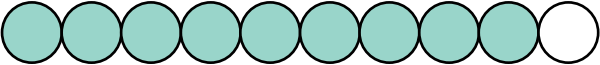

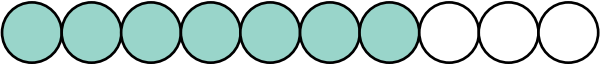



Pluss 1	61	Pluss 10
---------	----	----------

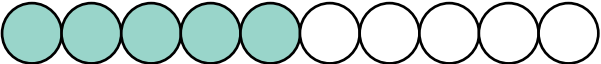
Pluss 1	39	Pluss 10
---------	----	----------



10'er venner

Skriv tall i den tomme ruten som gir resultatet 10.

 $8 + \square = 10$	 $6 + \square = 10$
 $9 + \square = 10$	 $2 + \square = 10$
 $7 + \square = 10$	 $3 + \square = 10$
 $1 + \square = 10$	 $4 + \square = 10$

 $5 + \square = 10$
--





En mer og en mindre



Legg 1 til tallet

96

37

19

45

71

8

Trekk 1 fra tallet

23

45

88


90

51

14



To mer og to mindre



Legg 2 til tallet

63	
28	
73	
49	
21	
40	

Trekk 2 fra tallet

11	
1	
52	
66	
81	
55	

Pluss 5

Legg 5 til tallet

9

3

7

+

0

?

33	
42	
64	
23	
98	
57	
82	
18	

4

+

1

6

2

5

8

6

Pluss 10

Legg 10 til tallet

2

+

7

0

4

8

11	
28	
45	
9	
12	
67	
36	
75	

9

3

1

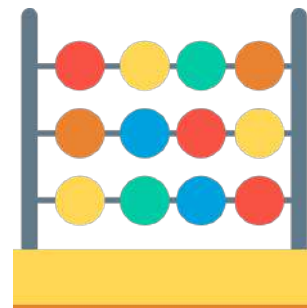
5

+



Pluss

Legg sammen tallene.



$$10 + 20 + 30 =$$

$$40 + 10 + 20 =$$

$$10 + 10 + 10 =$$

$$30 + 40 + 10 =$$

$$50 + 20 + 20 =$$

$$30 + 10 + 10 =$$

$$10 + 50 + 20 =$$

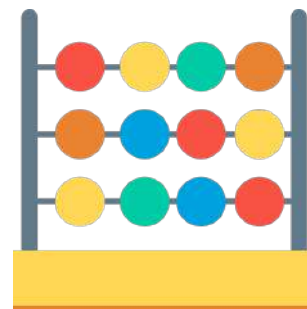
$$40 + 40 + 10 =$$

$$20 + 30 + 30 =$$



Pluss

Legg sammen tallene.



$$200 + 200 + 400 =$$

$$500 + 100 + 100 =$$

$$300 + 200 + 200 =$$

$$100 + 500 + 300 =$$

$$200 + 400 + 300 =$$

$$300 + 100 + 100 =$$

$$600 + 100 + 100 =$$

$$300 + 300 + 300 =$$

$$400 + 100 + 100 =$$

Riktig eller galt?



Sett ✓ ved de plusstykker som er riktige.

Sett ✗ ved de plusstykker som er galt.

$8 + 2 = 10$

$3 + 2 = 6$

$4 + 5 = 11$

$7 + 2 = 9$

$5 + 2 = 8$

$4 + 2 = 6$

$10 + 2 = 12$

$9 + 1 = 10$

$3 + 4 = 7$

$8 + 1 = 11$

$6 + 5 = 9$

$3 + 1 = 4$

$7 + 1 = 8$

$4 + 4 = 8$