
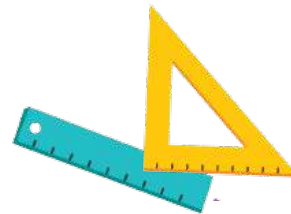


Mitt gangehefte

3. - 4. klasse



Mitt navn: _____

Gjør ferdig tallrekkene



Fyll ut de tomme rutene i tabellene.

2					12				20
---	--	--	--	--	----	--	--	--	----

3							24		30
---	--	--	--	--	--	--	----	--	----

4			16						40
---	--	--	----	--	--	--	--	--	----


5						35			50
---	--	--	--	--	--	----	--	--	----

6				30					60
---	--	--	--	----	--	--	--	--	----

7	14								70
---	----	--	--	--	--	--	--	--	----

8					48				80
---	--	--	--	--	----	--	--	--	----

9							72		90
---	--	--	--	--	--	--	----	--	----



Fargelegg regnestykket

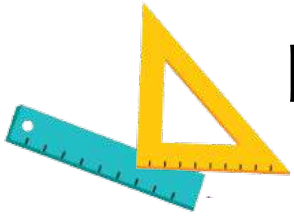
6 7

$$2 \times 8 = \underline{16}$$


$$3 \times 9 = \underline{\quad}$$

$$4 \times 7 = \underline{\quad}$$

$$5 \times 6 = \underline{\quad}$$



Regn ut gangestykkene



5	x	8	=	
---	---	---	---	--

3	x	3	=	
---	---	---	---	--

7	x	4	=	
---	---	---	---	--

9	x	2	=	
---	---	---	---	--

4	x	6	=	
---	---	---	---	--

8	x	7	=	
---	---	---	---	--

7	x	7	=	
---	---	---	---	--



Fyll ut de tomme feltene

78

$4 \times \underline{\quad} = 16$

$\underline{\quad} \times 7 = 21$

$8 \times \underline{\quad} = 24$

$\underline{\quad} \times 5 = 45$

$9 \times \underline{\quad} = 81$

$\underline{\quad} \times 7 = 42$

$3 \times \underline{\quad} = 27$

$\underline{\quad} \times 3 = 18$

$6 \times \underline{\quad} = 36$

$\underline{\quad} \times 9 = 63$

$2 \times \underline{\quad} = 18$


$\underline{\quad} \times 8 = 64$

$7 \times \underline{\quad} = 49$


$\underline{\quad} \times 4 = 44$

$5 \times \underline{\quad} = 25$

$\underline{\quad} \times 5 = 60$



En tur på butikken

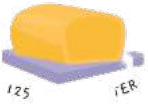


Det skal handles inn til å kunne bake en banankake. Hvor mye kommer det til å koste til sammen?



mel
11 kr.

Du skal bruke **4** poser mel. Hvordan ser regnestykket ut?




smør
7 kr.

Du skal bruke **3** pakker med smør.



banan
4 kr.

Du skal bruke **7** bananer.



egg
6 kr.


Du skal bruke **4** egg.



melk
9 kr.

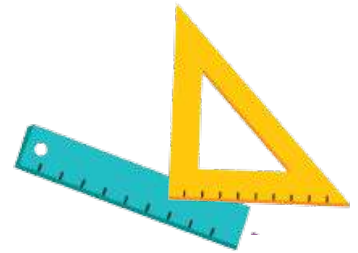
Du skal bruke **2** liter melk.

Hvor mye koster det til sammen?





På kryss og tvers



4	x	8	=		
---	---	---	---	--	--

9	x		=	1	8
---	---	--	---	---	---



				1		7
				=		x
	x		=	1	2	
						=



1	2	x		=		
---	---	---	--	---	--	--

56 Finn på regnestykkene selv 78

$$\underline{\quad} \times \underline{\quad}$$

$$= 24$$

$$\underline{\quad} \times \underline{\quad}$$

$$\underline{\quad} \times \underline{\quad}$$

$$= 36$$

$$\underline{\quad} \times \underline{\quad}$$

$$\underline{\quad} \times \underline{\quad}$$

$$= 29$$

$$\underline{\quad} \times \underline{\quad}$$



Gange med 2-sifrede tall



$$14 \times 16 = \underline{224}$$

X	10	4
10	100	40
6	60	24

$$13 \times 17 = \underline{\hspace{2cm}}$$

X		

$$21 \times 15 = \underline{\hspace{2cm}}$$

X		

$$12 \times 18 = \underline{\hspace{2cm}}$$

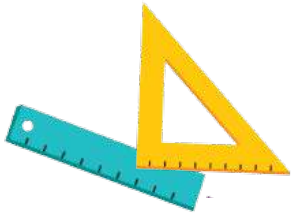
X		

$$19 \times 22 = \underline{\hspace{2cm}}$$

X		

$$31 \times 16 = \underline{\hspace{2cm}}$$

X		



Løs gangestykkene



18	X	3	=	
----	---	---	---	--

11	X	9	=	
----	---	---	---	--

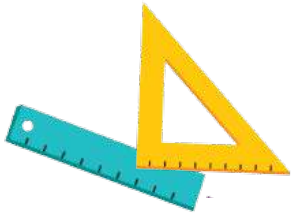
4	X	12	=	
---	---	----	---	--

6	X	15	=	
---	---	----	---	--

16	X	5	=	
----	---	---	---	--

8	X	13	=	
---	---	----	---	--

17	X	2	=	
----	---	---	---	--



Løs gangestykkene



18	X	11	=	
----	---	----	---	--

12	X	12	=	
----	---	----	---	--

13	X	15	=	
----	---	----	---	--

19	X	10	=	
----	---	----	---	--

14	X	16	=	
----	---	----	---	--

15	X	15	=	
----	---	----	---	--

17	X	13	=	
----	---	----	---	--