


Mitt divisjonshefte



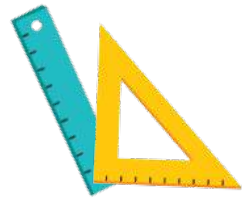
3. - 4. klasse



Mitt navn: _____




Tell og del opp



Del inn i mengder på 4.


$20 : 4 = \underline{\hspace{2cm}}$




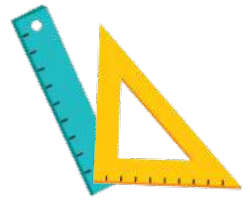
Del inn i mengder på 5.

$30 : 5 = \underline{\hspace{2cm}}$







Del og divider



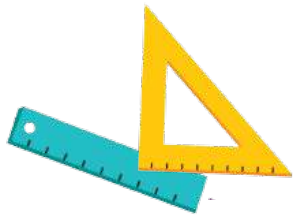
$$: 2 = \underline{\hspace{2cm}}$$




$$: 5 = \underline{\hspace{2cm}}$$



$$: 10 = \underline{\hspace{2cm}}$$



Løs regnestykkene



8	:	2	=	
---	---	---	---	--

12	:	3	=	
----	---	---	---	--

6	:	3	=	
---	---	---	---	--

16	:	4	=	
----	---	---	---	--


15	:	3	=	
----	---	---	---	--

20	:	5	=	
----	---	---	---	--

30	:	6	=	
----	---	---	---	--



Løs regnestykkene



24	:	3	=	
----	---	---	---	--

14	:	2	=	
----	---	---	---	--

25	:	5	=	
----	---	---	---	--

36	:	6	=	
----	---	---	---	--

40	:	4	=	
----	---	---	---	--

18	:	3	=	
----	---	---	---	--

42	:	6	=	
----	---	---	---	--



Fyll ut de tomme feltene



$16 : \underline{\quad\quad} = 4$

$21 : \underline{\quad\quad} = 7$

$24 : \underline{\quad\quad} = 8$

$45 : \underline{\quad\quad} = 5$

$81 : \underline{\quad\quad} = 9$

$42 : \underline{\quad\quad} = 7$

$27 : \underline{\quad\quad} = 3$

$18 : \underline{\quad\quad} = 6$

$36 : \underline{\quad\quad} = 6$

$63 : \underline{\quad\quad} = 7$

$18 : \underline{\quad\quad} = 9$

$64 : \underline{\quad\quad} = 8$

$49 : \underline{\quad\quad} = 7$

$40 : \underline{\quad\quad} = 10$

$25 : \underline{\quad\quad} = 5$

$42 : \underline{\quad\quad} = 21$



Hvor mange penger?

78

4 venner er på tur. Hvor mye skal de betale hver?

1. De kjøper chips og brus til **100** kr.

Hvor mye skal de betale hver?



$$100 : 4 =$$

2. De går på kino og bruker **500** kr. Hvor

mye skal de betale hver?



$$500 : 4 =$$

3. De går til parken og kjøper med en basketball på veien, som koster **120** kr. Hvor mye skal de betale

hver?



$$120 : 4 =$$

3. De tar bussen hjem og bruker **60** kr. på billettene. Hvor mye skal de betale hver?



$$60 : 4 =$$

5 6 Finn på regnestykkene selv 7 8

_____ : _____

_____ : _____

_____ : _____

_____ : _____

_____ : _____

_____ : _____

= 7

= 4

= 5



Del opp så alle får like mye



$78 : 3 = \underline{\quad\quad}$

Rest	Peter	Pia	Nils
78	20	20	20
18	5	5	5
3	1	1	1
0	= 26	= 26	= 26

$42 : 3 = \underline{\quad\quad}$

Rest	Peter	Pia	Nils

$105 : 3 = \underline{\quad\quad}$

Rest	1	2	3

$126 : 3 = \underline{\quad\quad}$

Rest	1	2	3