

10-tallets venner

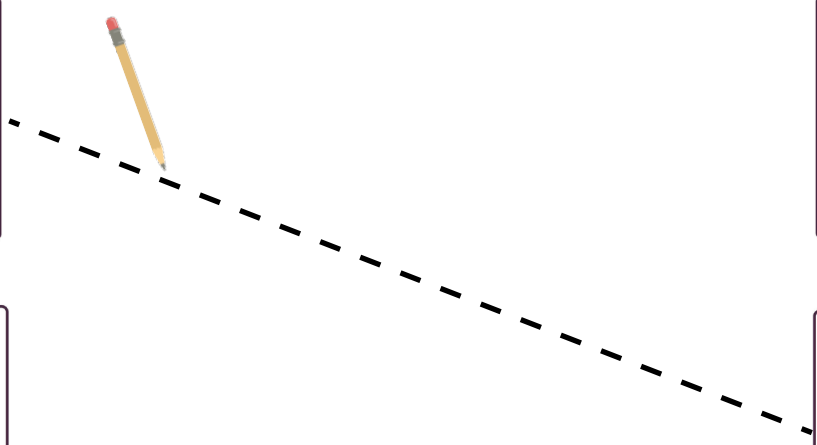







Navn: _____

Klasse: _____



Finn 10-tallsvennene





Utfyll feltene



1

+

=

10

9

+

=

10

8

+

=

10

7

+

=

10

4

+

=

10

5

+

=

10

2

+

=

10

Fargelegg 10-tallsvennene

$1+8$

$2+8$

$7+3$

$4+5$

$7+5$

$10+1$

$3+3$

$1+9$

$4+6$

$5+5$

$1+3$

$8+2$

$10+0$

$7+3$

$6+3$

$5+3$

$9+1$

Finn 10-tallets venn



Fargelegg feltene

Fargelegg første tall med **grønn** og andre tall med **rød**

$4 + 6 = 10$



$7 + 3 = 10$



$5 + 5 = 10$



$2 + 8 = 10$



$1 + 9 = 10$



$6 + 4 = 10$



$8 + 2 = 10$









$3 + 7 = 10$



$5 + 5 = 10$



Finn 10-tallsvennene



Tegn en strek slik at regnestykket blir riktig

A math puzzle consisting of numbers in circles and plus signs. The numbers are arranged as follows:

- Top row: 2 (red circle) and 0 (green circle)
- Second row: 3 (yellow circle) and 8 (light blue circle)
- Third row: 10 (purple circle) and 4 (pink circle)
- Fourth row: 1 (orange circle) and 5 (light blue circle)
- Fifth row: 7 (teal circle) and 9 (yellow circle)
- Sixth row: 5 (orange circle) and 6 (light blue circle)

Plus signs (+) are placed between the numbers in the following positions:

- Between 2 and 8 (connected by a dashed red line)
- Between 3 and 10
- Between 1 and 5
- Between 5 and 7
- Between 9 and 6

Sant eller usant?

$3 + 7$



$6 + 3$



$8 + 1$



$1 + 9$



$5 + 5$



$2 + 2$



$4 + 6$



$10 + 1$



$2 + 7$



$8 + 1$



$8 + 2$



$5 + 3$



Lag selv en 10-tallsvenn

	+		=	10
--	---	--	---	----

	+		=	10
--	---	--	---	----

	+		=	10
--	---	--	---	----

	+		=	10
--	---	--	---	----

	+		=	10
--	---	--	---	----

	+		=	10
--	---	--	---	----

10-tallsvennspillet

Slå en terning. Før du kan flytte din brikke, må du svare riktig på hvilken 10-tallsvenn som mangler. Når du har svart riktig kan du flytte din brikke. Hvis du svarer feil må du bli stående. Den første i mål vinner spillet.

