


# Mit matematikhæfte om træer

8

5




3

2

Mit navn:

# Plus


Regn plusstykkerne ud.



+





=



+



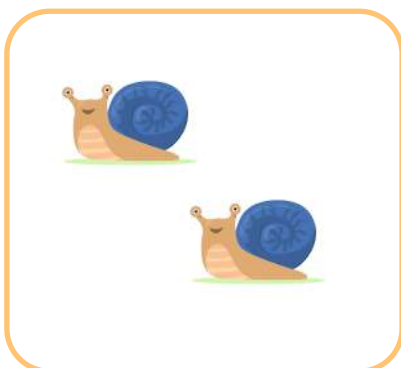

=




+




=



+



=



# Hvor mange cm?

Brug din lineal og skriv højden ned



\_\_\_\_\_ cm



\_\_\_\_\_ cm

\_\_\_\_\_ cm

\_\_\_\_\_ cm



\_\_\_\_\_ cm




\_\_\_\_\_ cm



# Farvelæg

Regn og farv billedet.



3

5

7

4






6

8



# Løs regnestykkerne

Udfyld resten af cirklerne.



# Find svaret

Find svaret på disse minus regnestykker og træk en streg hen til det rigtige resultat.

$10+3 =$

$6-1 =$

$11-3 =$

$2+3 =$

$9-1 =$

$4 + 4 =$

$14 - 1 =$

$5+8 =$



# Regnestykker

Lav talslangen.



→  $+4$   $-3$   $+14$   $+9$

4 ○ ○ ○ ○

→  $+7$   $+12$   $-3$   $+6$

12 ○ ○ ○ ○

→  $+10$   $-2$   $+3$   $-5$

16 ○ ○ ○ ○

→  $+9$   $-12$   $+6$   $-2$

21 ○ ○ ○ ○

# Find den samme sum

Sæt streg mellem regnestykket, og det rigtige facit.

$5+4$



$3+4$



$4+1$



$2+2$



$1+2$

