

Mit hæfte med plus - Niveau 1





Plus

Læg terningernes øjne sammen.



6 + 2 =

3 + 5 =

4 + 6 =

4 + 3 =

5 + 1 =

3 + 2 =








2 + 1 =


5 + 4 =

1 + 6 =

Plus

Læg terningernes øjne sammen.

	$4+1=$
	$6+4=$
	$2+2=$
	$3+5=$
	$1+6=$
	$2+5=$
	$6+5=$



Plus



Læg terningernes øjne sammen.



$$\begin{array}{r} 4 \quad + \quad 3 \\ \hline = \quad 7 \end{array}$$



$$\begin{array}{r} \quad + \quad \\ \hline = \quad \end{array}$$



$$\begin{array}{r} \quad + \quad \\ \hline = \quad \end{array}$$



$$\begin{array}{r} \quad + \quad \\ \hline = \quad \end{array}$$



$$\begin{array}{r} \quad + \quad \\ \hline = \quad \end{array}$$



$$\begin{array}{r} \quad + \quad \\ \hline = \quad \end{array}$$



$$\begin{array}{r} \quad + \quad \\ \hline = \quad \end{array}$$



$$\begin{array}{r} \quad + \quad \\ \hline = \quad \end{array}$$



$$\begin{array}{r} \quad + \quad \\ \hline = \quad \end{array}$$

Lav et tal

Skriv tal ind i kasserne som tilsammen giver 10,
9, 8 og 7.



Lav 10

$$\square + \square = 10$$

$$\square + \square = 10$$

$$\square + \square = 10$$

$$\square + \square = 10$$

Lav 9

$$\square + \square = 9$$

$$\square + \square = 9$$

$$\square + \square = 9$$

$$\square + \square = 9$$

Lav 8

$$\square + \square = 8$$

$$\square + \square = 8$$

$$\square + \square = 8$$

$$\square + \square = 8$$

Lav 7

$$\square + \square = 7$$

$$\square + \square = 7$$

$$\square + \square = 7$$

$$\square + \square = 7$$

Plus

Læg terningerne sammen og skriv svaret i den tomme kasse.

$$\begin{array}{|c|} \hline \text{1} \\ \hline \end{array} + \begin{array}{|c|} \hline \text{1} \\ \hline \end{array} = \begin{array}{|c|} \hline \\ \hline \end{array}$$

$$\begin{array}{|c|} \hline \text{2} \\ \hline \end{array} + \begin{array}{|c|} \hline \text{2} \\ \hline \end{array} = \begin{array}{|c|} \hline \\ \hline \end{array}$$

$$\begin{array}{|c|} \hline \text{3} \\ \hline \end{array} + \begin{array}{|c|} \hline \text{3} \\ \hline \end{array} = \begin{array}{|c|} \hline \\ \hline \end{array}$$


$$\begin{array}{|c|} \hline \text{4} \\ \hline \end{array} + \begin{array}{|c|} \hline \text{4} \\ \hline \end{array} = \begin{array}{|c|} \hline \\ \hline \end{array}$$

$$\begin{array}{|c|} \hline \text{5} \\ \hline \end{array} + \begin{array}{|c|} \hline \text{5} \\ \hline \end{array} = \begin{array}{|c|} \hline \\ \hline \end{array}$$

$$\begin{array}{|c|} \hline \text{6} \\ \hline \end{array} + \begin{array}{|c|} \hline \text{6} \\ \hline \end{array} = \begin{array}{|c|} \hline \\ \hline \end{array}$$

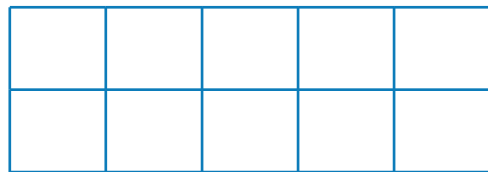
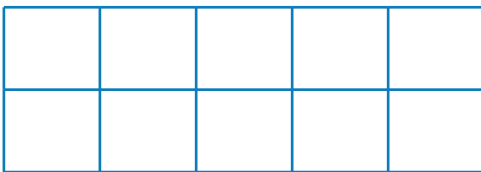
Lav 10

Skriv tal ind i kasserne som tilsammen giver 10.
Brug de blå firkanter som hjælp.



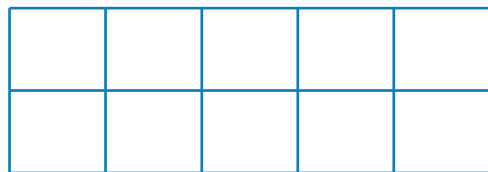
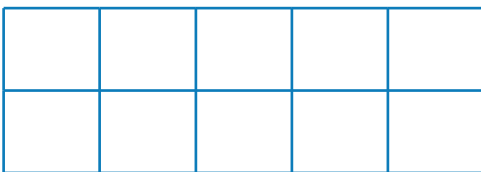
$$\textcircled{3} + \textcircled{7} = 10$$

$$\textcirc{\quad} + \textcirc{\quad} = 10$$



$$\textcirc{\quad} + \textcirc{\quad} = 10$$

$$\textcirc{\quad} + \textcirc{\quad} = 10$$



$$\textcirc{\quad} + \textcirc{\quad} = 10$$


$$\textcirc{\quad} + \textcirc{\quad} = 10$$



Plus 10 og 1

Læg 10 og 1 til tallet i midten.

Plus 1	87	Plus 10
--------	----	---------



Plus 1	15	Plus 10
--------	----	---------

Plus 1	56	Plus 10
--------	----	---------

Plus 1	6	Plus 10
--------	---	---------

Plus 1	72	Plus 10
--------	----	---------

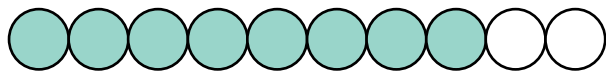
Plus 1	61	Plus 10
--------	----	---------

Plus 1	39	Plus 10
--------	----	---------

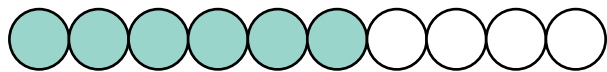


10'er venner

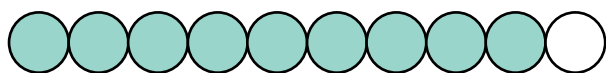
Skriv tallet i kassen som giver resultatet 10.



$$8 + \square = 10$$



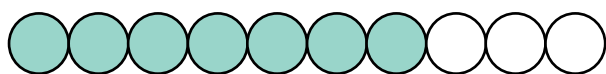
$$6 + \square = 10$$



$$9 + \square = 10$$



$$2 + \square = 10$$



$$7 + \square = 10$$



$$3 + \square = 10$$




$$1 + \square = 10$$



$$4 + \square = 10$$



$$5 + \square = 10$$





En mere og en mindre



Læg 1 til tallet

96

37

19

45

71

8

Træk 1 fra tallet

23

45

88

90

51

14



To mere og to mindre



Læg 2 til tallet

63	
28	
73	
49	
21	
40	

Træk 2 fra tallet

11	
1	
52	
66	
81	
55	

Plus 5

Læg 5 til tallet

9

3

7

+

0

?

33	
42	
64	
23	
98	
57	
82	
18	

4

+

1

6

2

5

8

6

Plus 10

Læg 10 til tallet

2

+

7

0

4

8

11	
28	
45	
9	
12	
67	
36	
75	

9

3

1

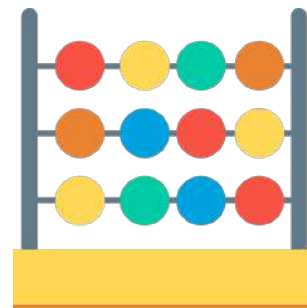
5

+



Plus

Læg tallene sammen.



$$10 + 20 + 30 =$$

$$40 + 10 + 20 =$$

$$10 + 10 + 10 =$$

$$30 + 40 + 10 =$$

$$50 + 20 + 20 =$$

$$30 + 10 + 10 =$$

$$10 + 50 + 20 =$$

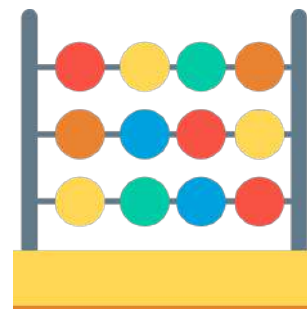
$$40 + 40 + 10 =$$

$$20 + 30 + 30 =$$



Plus

Læg tallene sammen.



$$200 + 200 + 400 =$$

$$500 + 100 + 100 =$$

$$300 + 200 + 200 =$$

$$100 + 500 + 300 =$$

$$200 + 400 + 300 =$$


$$300 + 100 + 100 =$$

$$600 + 100 + 100 =$$

$$300 + 300 + 300 =$$

$$400 + 100 + 100 =$$

Rigtig eller forkert?



Sæt ✓ ved de plusstykker der er rigtige.

Sæt ✗ ved de plusstykker der er forkerte.

$8 + 2 = 10$

$3 + 2 = 6$

$4 + 5 = 11$

$7 + 2 = 9$

$5 + 2 = 8$

$4 + 2 = 6$

$10 + 2 = 12$

$9 + 1 = 10$

$3 + 4 = 7$

$8 + 1 = 11$

$6 + 5 = 9$

$3 + 1 = 4$

$7 + 1 = 8$

$4 + 4 = 8$