

Mit hæfte med minus - Niveau 1



Minus

Træk terningernes øjne fra hinanden.



6 - 3 = 3

5 - 1 =

4 - 2 =

4 - 1 =

5 - 2 =

6 - 4 =

2 - 1 =

4 - 2 =


6 - 1 =

$4 - 2$


Minus

Udregn og skriv svaret.


3




-




=




-




=




-




=




-



=



-



=

Plus



Træk terningernes øjne fra hinanden.



$$\begin{array}{r} 4 \quad - \quad 3 \\ \hline = \quad \underline{\quad 7 \quad} \end{array}$$



$$\begin{array}{r} \quad - \quad \quad \\ \hline = \quad \underline{\quad \quad} \end{array}$$



$$\begin{array}{r} \quad - \quad \quad \\ \hline = \quad \underline{\quad \quad} \end{array}$$



$$\begin{array}{r} \quad - \quad \quad \\ \hline = \quad \underline{\quad \quad} \end{array}$$



$$\begin{array}{r} \quad - \quad \quad \\ \hline = \quad \underline{\quad \quad} \end{array}$$



$$\begin{array}{r} \quad - \quad \quad \\ \hline = \quad \underline{\quad \quad} \end{array}$$



$$\begin{array}{r} \quad - \quad \quad \\ \hline = \quad \underline{\quad \quad} \end{array}$$



$$\begin{array}{r} \quad - \quad \quad \\ \hline = \quad \underline{\quad \quad} \end{array}$$



$$\begin{array}{r} \quad - \quad \quad \\ \hline = \quad \underline{\quad \quad} \end{array}$$

Lav et tal

Skriv tal ind i kasserne, når de trækkes fra hinanden giver 10, 5, 4 og 2.



Lav 10

$$15 - 5 = 10$$

$$\square - \square = 10$$

$$\square - \square = 10$$

$$\square - \square = 10$$

Lav 5

$$\square - \square = 5$$

$$\square - \square = 5$$

$$\square - \square = 5$$

$$\square - \square = 5$$

Lav 4

$$\square - \square = 4$$

$$\square - \square = 4$$

$$\square - \square = 4$$

$$\square - \square = 4$$

Lav 2

$$\square - \square = 2$$

$$\square - \square = 2$$

$$\square - \square = 2$$

$$\square - \square = 2$$

Minus

Sæt en streg fra regnestykket og hen til det rigtige svar.

$17 - 2$

$20 - 10$

$20 - 5$

$8 - 3$

$14 - 4$

$15 - 5$

$13 - 8$



5



10



15

Minus 1 og 10

Træk 1 og 10 fra tallet i midten.

Minus 1	56	Minus 10
---------	----	----------



Minus 1	31	Minus 10
---------	----	----------

Minus 1	63	Minus 10
---------	----	----------

Minus 1	12	Minus 10
---------	----	----------

Minus 1	44	Minus 10
---------	----	----------

Minus 1	28	Minus 10
---------	----	----------

Minus 1	39	Minus 10
---------	----	----------



Minus 4

Træk 4 fra tallet.

9

3

7

+

0

?

11	
36	
59	
65	
82	
74	
43	
28	

4

+

1


6

2

5

8

Rigtig eller forkert?



Sæt  ved de regnestykker der er rigtige.

Sæt  ved de regnestykker der er forkerte.

$8 - 4 = 4$ $10 - 4 = 6$

$10 - 5 = 6$ $9 - 6 = 3$

$7 - 3 = 3$ $14 - 3 = 10$

$15 - 5 = 10$ $5 - 3 = 1$

$7 - 5 = 2$ $8 - 3 = 6$

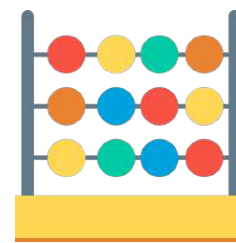
$6 - 5 = 0$ $10 - 4 = 4$

$11 - 3 = 7$ $13 - 6 = 7$



Minus

Træk tallene fra hinanden.



$$600 - 100 - 200 =$$

$$400 - 100 - 100 =$$

$$500 - 200 - 100 =$$

$$700 - 300 - 100 =$$

$$900 - 600 - 200 =$$

$$400 - 200 - 100 =$$

$$500 - 100 - 200 =$$

$$800 - 100 - 500 =$$

$$300 - 100 - 100 =$$



Minus

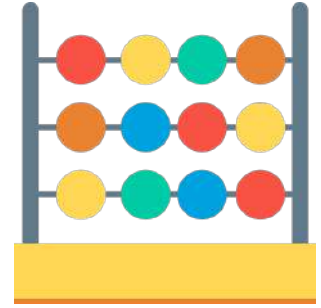
Skriv det tal der manges, så resultatet bliver rigtigt.

$7 - 2 = 5$	$6 - \bigcirc = 3$
$9 - \bigcirc = 1$	$5 - \bigcirc = 3$
$4 - \bigcirc = 2$	$9 - \bigcirc = 5$
$5 - \bigcirc = 4$	$8 - \bigcirc = 7$
$10 - \bigcirc = 8$	$5 - \bigcirc = 3$
$3 - \bigcirc = 1$	$11 - \bigcirc = 6$
$7 - \bigcirc = 6$	$15 - \bigcirc = 5$



Minus

Træk tallene fra hinanden.



$$40 - 10 - 30 =$$

$$50 - 10 - 10 =$$

$$30 - 10 - 10 =$$

$$80 - 30 - 10 =$$

$$60 - 40 - 10 =$$

$$90 - 10 - 30 =$$

$$70 - 40 - 20 =$$

$$40 - 20 - 20 =$$

$$90 - 20 - 40 =$$

Minus 10

Træk 10 fra tallet

6

2

+

28	
14	
67	
12	
79	
53	
61	
36	

7

9

0

3

4

1

8

5

+



2 og 4 mindre



Træk 2 fra tallet

82

90

47

58

21

49

Træk 4 fra tallet

11

5

21

55


92


73


Streg over

Streg det rigtige antal over, så svaret bliver rigtigt.


$$4 - 4 = 3$$


$$8 - 3 = 5$$


$$6 - 6 = 1$$


$$10 - 6 = 4$$