



# Intervalos - Repaso - 4

## 1. Califica los siguientes intervallos.



Two staves of musical notation. The first staff contains six intervals: a major second, a minor third, a major third, a minor fourth, a major fourth, and a minor fifth. The second staff contains six intervals: a major sixth, a minor seventh, a major seventh, a minor eighth, a major eighth, and a minor ninth.

## 2. Realiza los siguientes intervallos ascendente.




Two staves of musical notation. The first staff contains six intervals: 4ª *aum.*, 8ª *justa*, 3ª *mayor*, 5ª *dis.*, 7ª *menor*, and 2ª *mayor*. The second staff contains six intervals: 5ª *justa*, 4ª *dis.*, 3ª *aum.*, 6ª *dis.*, 6ª *aum.*, and 4ª *justa*.

## 3. Realiza los siguientes intervallos descendente.



Two staves of musical notation. The first staff contains six intervals: 2ª *aum.*, 3ª *menor*, 5ª *aum.*, 4ª *aum.*, 3ª *dis.*, and 6ª *aum.*. The second staff contains six intervals: 6ª *menor*, 3ª *menor*, 2ª *aum.*, 8ª *aum.*, 7ª *mayor*, and 4ª *justa*.

## 4. Rodea los intervallos que sean disminuidos.



Two staves of musical notation. The first staff contains six intervals: a minor second, a major second, a minor third, a major third, a minor fourth, and a major fourth. The second staff contains six intervals: a minor fifth, a major fifth, a minor sixth, a major sixth, a minor seventh, and a major seventh.