


**Framsteg i
matematiken**

Talen 11–18

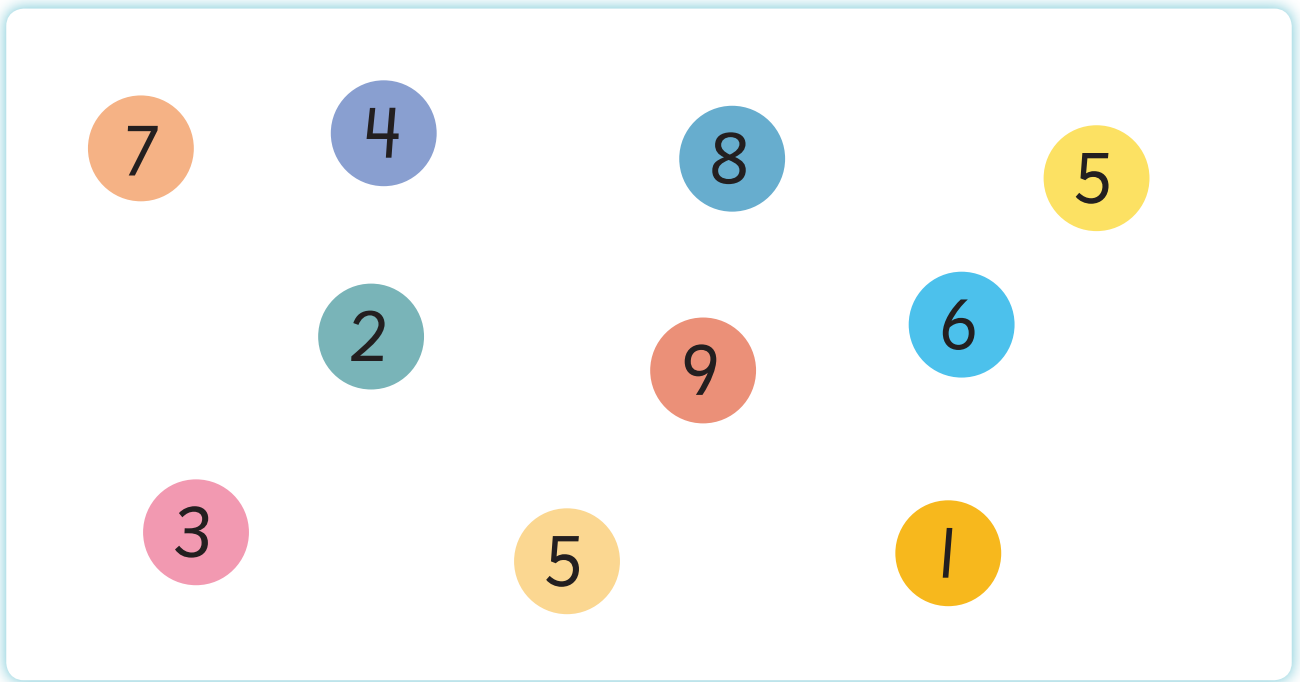


Mirvi Unge Thorsén

ASKUNGE

10-kamraterna

Ringa in 10-kamrater.



Skriv 10-kamraten.

$$10 = 5 + \underline{\quad}$$

$$10 = 6 + \underline{\quad}$$

$$10 = 7 + \underline{\quad}$$

$$10 = 1 + \underline{\quad}$$

$$10 = 2 + \underline{\quad}$$

$$10 = 3 + \underline{\quad}$$

$$10 = 9 + \underline{\quad}$$

$$10 = 8 + \underline{\quad}$$

$$10 = 4 + \underline{\quad}$$

$$10 = 5 + \underline{\quad}$$



Dela upp talet 11

elva



Rita prickar, streck eller kryss.

9

2

8

3


7

4


6

5


Det ska vara 11 kakor i varje ruta.
Hur många fattas?
Rita och skriv.




Det fattas _____ kakor.



Det fattas _____ kakor.



Det fattas _____ kakor.



Det fattas _____ kakor.



Det fattas _____ kakor.



Det fattas _____ kakor.

$$9 + 2 = 2 + 9$$



$$9 + 2 = \underline{\quad}$$



$$2 + 9 = \underline{\quad}$$

Skriv så att det stämmer.

