

# Vad heter formerna?

Skriv rätt namn på varje form.

Några av formerna kan ha flera namn.

Använd orden i rutan.



fyrhörning

rektangel

kvadrat

triangel

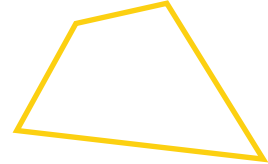
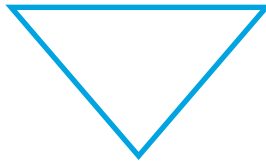
cirkel



---

---


---



---

---

---



---

---

---