

MONDAY

MONDAY

Write it in
words

Represent it

20

1 less

1 more

Write these numbers in words.

9

4

12

13

Complete the missing numbers in pairs.

20, 30, ____, 50, ____, ____, 80

100, 90, ____, 70, ____, ____, 40

Complete the missing numbers in pairs.

What is staying the same?

What is changing?

22, 32, ____, 52, ____, ____, 82

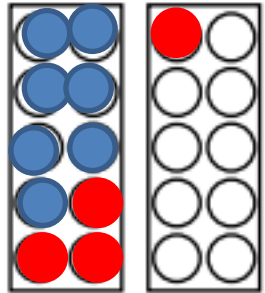
107, 97, ____, 77, ____, ____, 47

TUESDAY


TUESDAY

Use 2 colours to represent and calculate these additions.

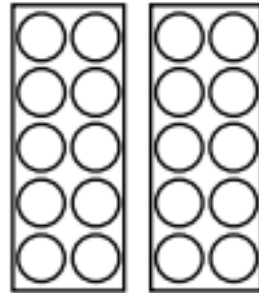
$7 + 4 = \boxed{11}$




$7 + 6 = \boxed{}$



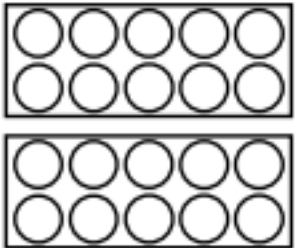
$7 + 7 = \boxed{}$



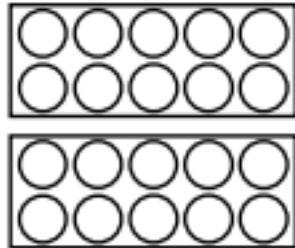
$7 + 5 = \boxed{}$



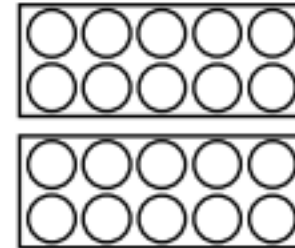
$8 + 7 = \boxed{}$



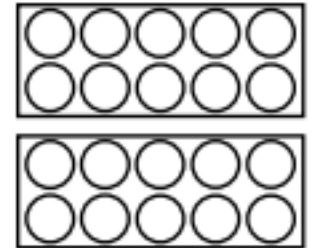
$9 + 5 = \boxed{}$



$8 + 8 = \boxed{}$



$9 + 7 = \boxed{}$



Which of these are incorrect?

$$7 + 6 = 13$$

$$3 + 10 = 13$$

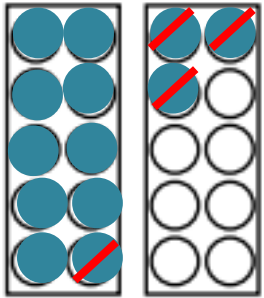
$$13 = 5 + 7$$

WEDNESDAY

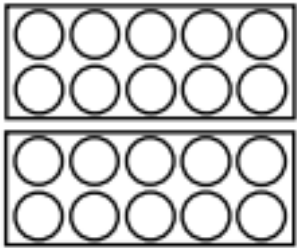
WEDNESDAY

First represent the colour you are starting with. Then cross out how many you are taking away. Count how many you have left.

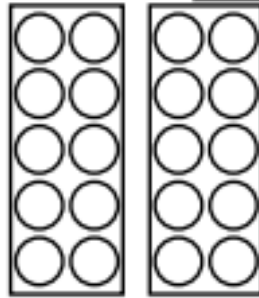
$13 - 4 = \boxed{9}$



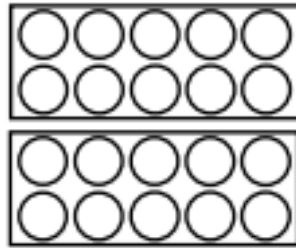
$14 - 7 = \boxed{}$




$15 - 7 = \boxed{}$



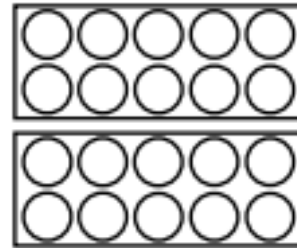
$16 - 8 = \boxed{}$



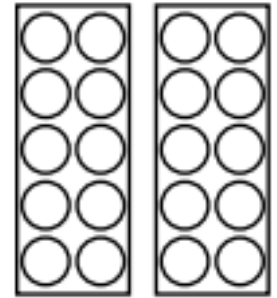
$11 - 7 = \boxed{}$



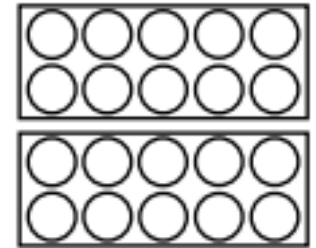
$12 - 8 = \boxed{}$



$16 - 9 = \boxed{}$



$15 - 9 = \boxed{}$



Which of these are incorrect?

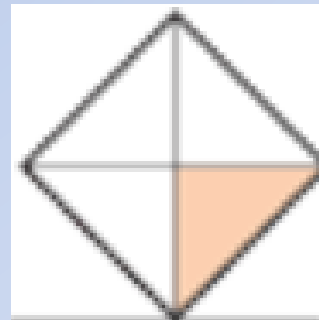
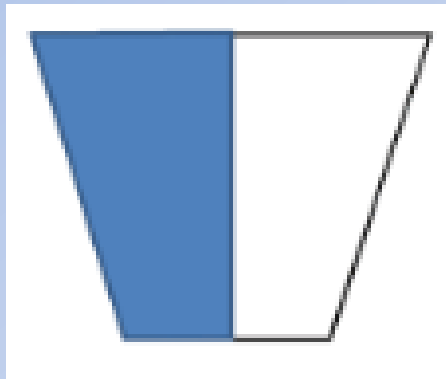
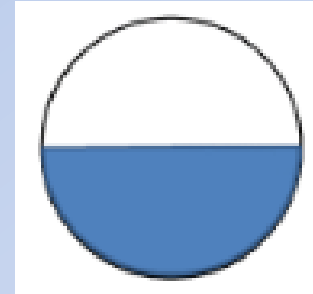

$$13 - 4 = 9$$

$$6 - 13 = 7$$

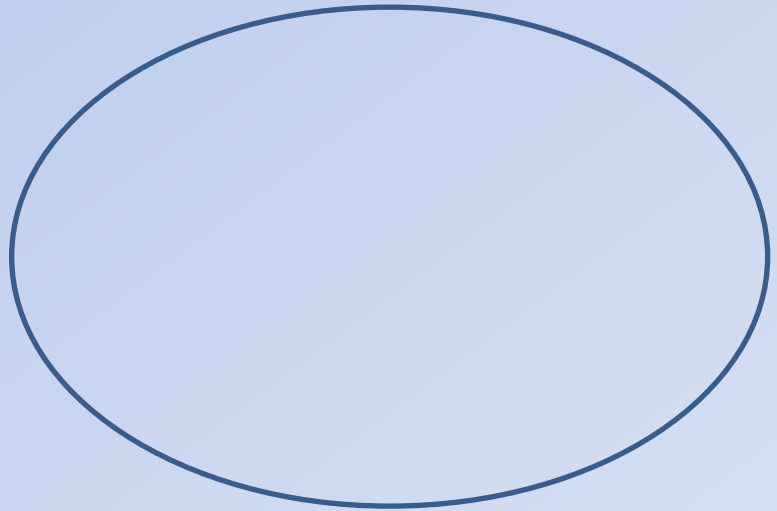
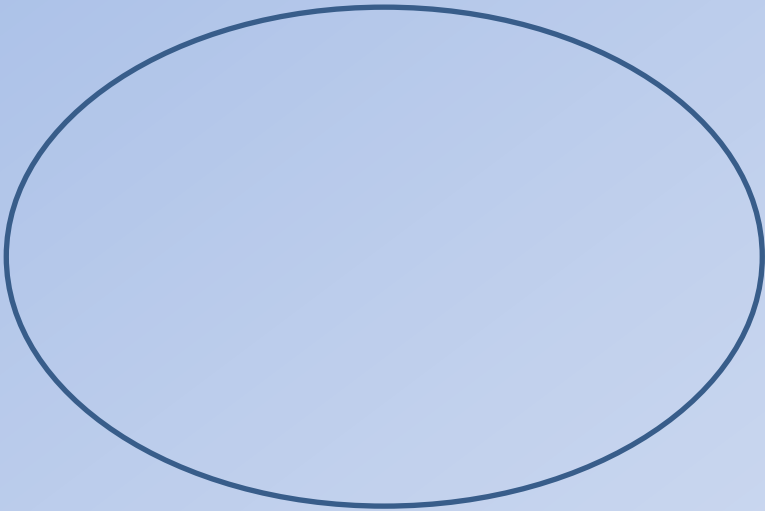
$$5 = 13 - 8$$

THURSDAY

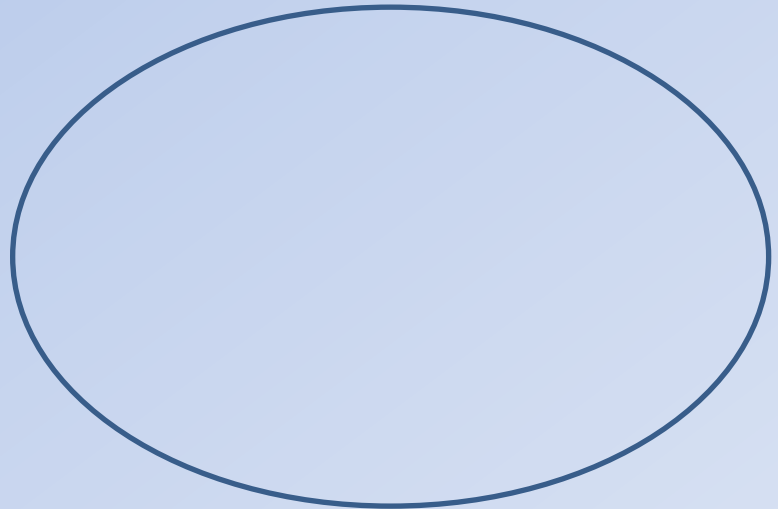
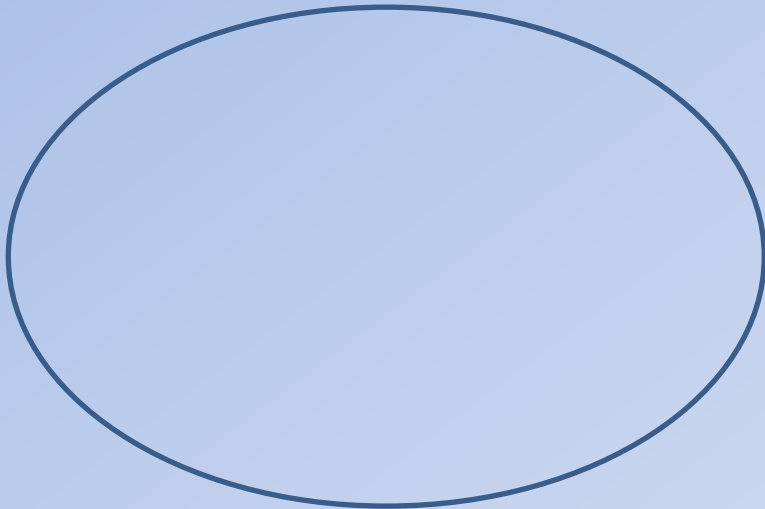
$\frac{1}{2}$ means 1 out of 2 equal parts. Which shapes have had $\frac{1}{2}$ shaded?



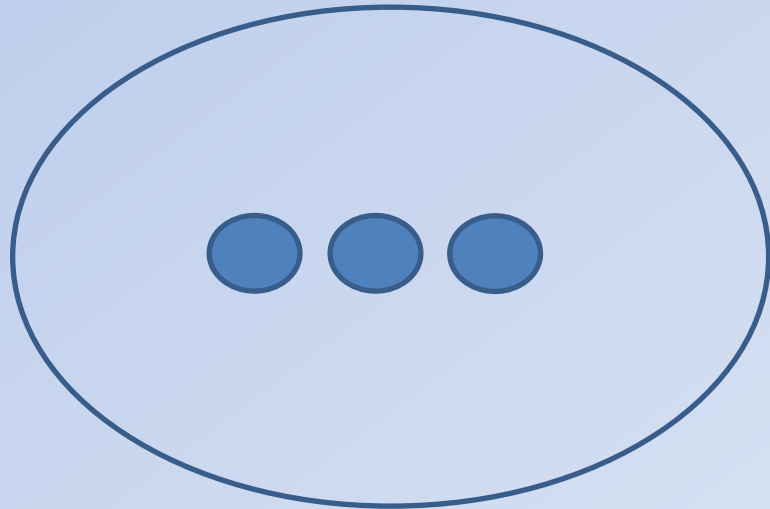
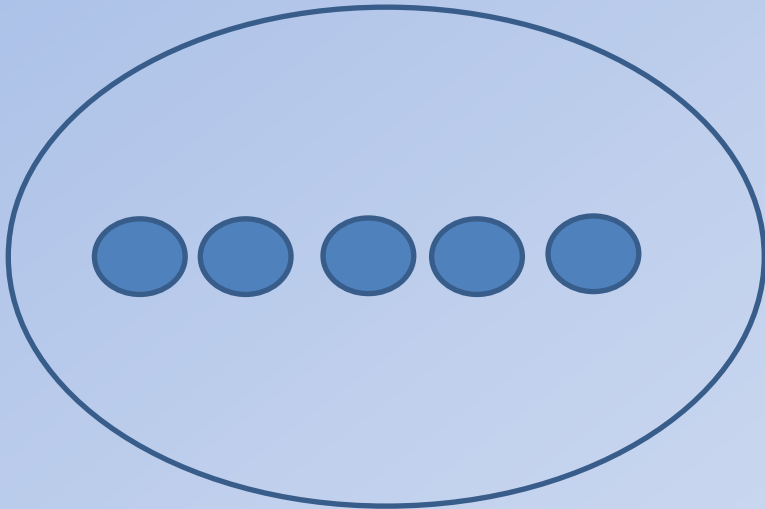
Find $\frac{1}{2}$ of 6.



Find $\frac{1}{2}$ of 10.



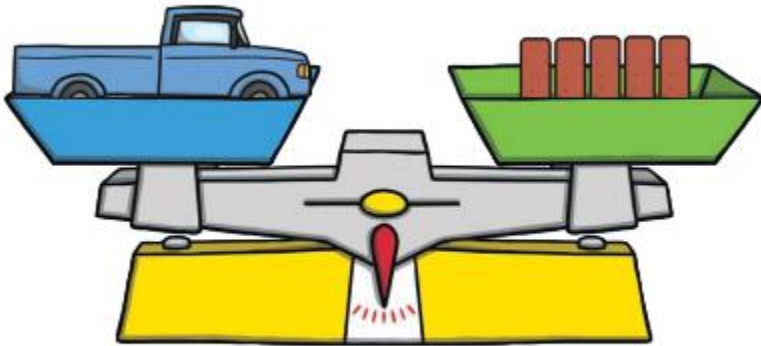
I have found $\frac{1}{2}$ of 8. What is my mistake?



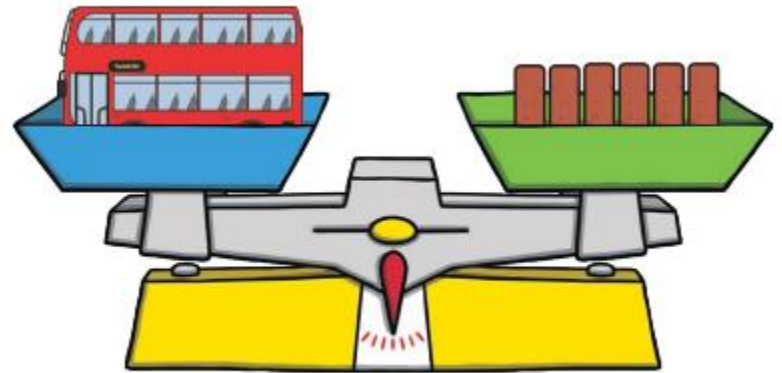
FRIDAY

The word "FRIDAY" is rendered in a bold, blue, three-dimensional sans-serif font. The letters have a slight gradient and a shadow effect, giving them a 3D appearance. Below the text is a faint, semi-transparent reflection of the word, creating a sense of depth and a polished look. The entire graphic is centered on a light blue background.

The truck weighs ____ bricks.



The bus weighs ____ bricks.




The truck is _____ than the bus.

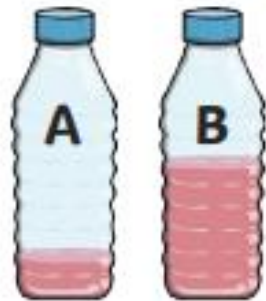
Complete these sentences using **heavier** and **lighter**

The duck is than the ball.

The ball is than the duck.




More or less?



less

more



A has _____ than B.

C has _____ than D.



Put them in order from empty to full.



empty

full