


European Flags

Match up the flag with the country. Write the names under the flags.



1.

a.




2.

b.



3.

c.



4.

d.



5.

e.



6.

f.




7.

g.



8.

h.



9.

i.

Extension: Can you write the name of the capital city under each country?

European Flags

Match up the flag with the country. Write the names under the flags.



1.

a.



2.

b.



3.

c.




4.

d.



5.

e.



6.

f.



7.

g.



8.

h.



9.

i.

Extension Task: Can you write the name of the capital city under each country?


European Flags

Match up the flag with the country. Write the names under the flags.



1.

a.




2.

b.



3.

c.



4.

d.



5.

e.



6.

f.



7.

g.



8.

h.



9.

i.

Extension: Can you write the name of the capital city under each country?

European Flags

Match up the flag with the country. Write the names under the flags.




1.

a.



2.

b.



3.

c.




4.

d.




5.

e.



6.

f.



7.

g.



8.

h.



9.

i.

Extension: Can you write the name of the capital city under each country?

Answers

European Flags Sheet 1:	European Flags Sheet 2:	European Flags Sheet 3:	European Flags Sheet 4:
1. France	1. Estonia	1. Albania	1. Poland
2. Spain	2. Romania	2. Czech Republic	2. Greece
3. Germany	3. Austria	3. Republic of Ireland	3. Malta
4. Norway	4. Belgium	4. England	4. Ukraine
5. Finland	5. Netherlands	5. Slovakia	5. Portugal
6. Sweden	6. Slovenia	6. Wales	6. Iceland
7. Russia	7. Bulgaria	7. Latvia	7. Denmark
8. Hungary	8. Italy	8. Croatia	8. Cyprus
9. Switzerland	9. Lithuania	9. Scotland	9. Luxembourg

Extension Task:

European Flags Sheet 1:	European Flags Sheet 2:	European Flags Sheet 3:	European Flags Sheet 4:
a. Paris	a. Tallin	a. Tirana	a. Warsaw
b. Madrid	b. Bucharest	b. Prague	b. Athens
c. Berlin	c. Vienna	c. Dublin	c. Valletta
d. Oslo	d. Brussels	d. London	d. Kiev
e. Helsinki	e. Amsterdam	e. Bratislava	e. Lisbon
f. Stockholm	f. Ljubljana	f. Cardiff	f. Reykjavik
g. Moscow	g. Sofia	g. Riga	g. Copenhagen
h. Budapest	h. Rome	h. Zagreb	h. Nicosia
i. Bern	i. Vilnius	i. Edinburgh	i. Luxembourg City