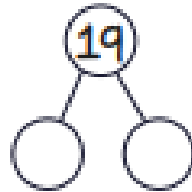
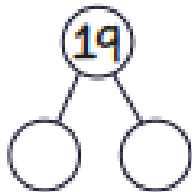


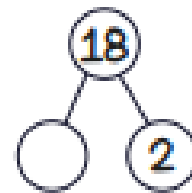
$12 + 5 = \square$

$19 - 8 = \square$

Complete the part-part-whole diagrams in two different ways.



Complete the part-part-whole diagram.



Circle the fact that equals 20.

$13 + 9$

$17 + 6$

$4 + 19$

$12 + 8$

Match each calculation to the answer.

$8 + 9$

20

$7 + 11$

17

$6 + 14$

18

Find the missing number.

$15 + \square = 20$

Find the missing digit.

$1\square - 9 = 5$

A bus has 8 passengers.

10 passengers get on the bus.

How many passengers are on the bus altogether?


Colin has collected 17 stickers.


Colin gives 9 stickers to Coco.


How many stickers does he have left?


How much money do Colin and Coco each have in their jars?

Circle who has the most money.

 Colin



 Coco




$$\frac{1}{2} \text{ of } 8 = \square$$

$$\frac{1}{4} \text{ of } 12 = \square$$

Circle the shapes with one half shaded.

Circle  $\frac{1}{4}$  of the stars.



Match the correct times.

three o'clock



half past 12



6 o'clock



Draw hands on the clock to show 4 o'clock.

Draw hands on the clock to show half past ten.

