

Doubles to 20

Number Shape Doubles

Write the number sentence for each number shape double.



$1 + 1 = \underline{\quad}$



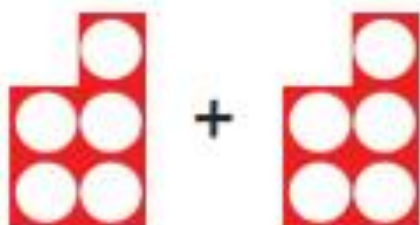
$2 + 2 = \underline{\quad}$



$3 + 3 = \underline{\quad}$



$4 + 4 = \underline{\quad}$




$5 + 5 = \underline{\quad}$

Doubles to 20

Number Shape Doubles


Write the number sentence for each number shape double.




+




$6 + 6 = \underline{\quad\quad}$




+




$7 + 7 = \underline{\quad\quad}$



+




$8 + 8 = \underline{\quad\quad}$




+



$9 + 9 = \underline{\quad\quad}$



+



$10 + 10 = \underline{\quad\quad}$